



# higher education & training

---

Department:  
Higher Education and Training  
**REPUBLIC OF SOUTH AFRICA**

N1550(E)(J3)H

## **NATIONAL CERTIFICATE**

### **TOURIST DESTINATIONS N5**

(22030115)

**3 June 2019 (X-Paper)**  
**09:00–12:00**

**OPEN-BOOK EXAMINATION**

**Candidates may take student portfolios containing notes, maps, brochures, guides, case studies, assignments and tests, AND textbooks, GSA magazine, pocket calculator and an atlas into the examination venue.**

**Candidates are entitled to 15 minutes reading time.**

**This question paper consists of 15 pages and three addenda of 4 pages.**

**DEPARTMENT OF HIGHER EDUCATION AND TRAINING**  
**REPUBLIC OF SOUTH AFRICA**  
NATIONAL CERTIFICATE  
TOURIST DESTINATIONS N5  
TIME: 3 HOURS  
MARKS: 200

---

**NOTE:** If you answer more than the required number of questions, only the required number will be marked. Clearly cross out ALL work you do NOT want to be marked.


**INSTRUCTIONS AND INFORMATION**


1. Answer ALL the questions in SECTION A.
  2. Answer any FOUR of the five questions in SECTION B.
  3. Read ALL the questions carefully.
  4. Number the answers according to the numbering system used in this question paper.
  5. Start each question on a NEW page.
  6. Write neatly and legibly.
-

**SECTION A**

ALL the questions in this section are COMPULSORY.


**QUESTION 1****1.1 AFRICAN SECTION: MAPWORK**


Study the map on ADDENDUM A as well as your World Travel Atlas and answer the following questions: 

- 1.1.1 Give names for the TWO dotted lines. (2)
- 1.1.2 Name FIVE African countries the equator crosses. (5)
- 1.1.3 Name the THREE lakes on the borders of Tanzania. (3)
- 1.1.4 Name the largest lake in Africa. (1)
- 1.1.5 Name ALL the countries that border Zimbabwe. (5)
- 1.1.6 Name the geographical feature that forms 'a scar over Africa's face'.  (1)
- 1.1.7 Name the highest mountain in Africa. (1)
- 1.1.8 Name the country where the mountain, mentioned in QUESTION 1.1.7, is situated. (1)
- 1.1.9 From which lake does the world's longest river, the Nile, originate? (1)

**1.2 INDIAN OCEAN ISLAND SECTION: MAPWORK**

Study the map on ADDENDUM A as well as your World Travel Atlas and answer the questions.

- 1.2.1 What is an *archipelago*? (2)
- 1.2.2 Name THREE archipelagos clearly indicated on the map. (3)
- 1.2.3 What does the abbreviation 'Fr.' after Reunion signify?  (1)
- 1.2.4 Name ONE island group that lies on, and north of the equator. (1)
- 1.2.5 Explain exactly what an *atoll* is. (2)
- 1.2.6 Name ONE island group where one will find a lot of atolls, for example, the RAA atoll. (1)

- 1.2.7 Give the names of the FOUR islands of the Comoros. (4)
- 1.2.8 Name the island situated northeast of Mauritius that is part of its territory. (1)
- 1.2.9 Name the island that is the known as the 'Mountain Island in the Indian Ocean'.  (1)
- 1.2.10 Describe the exact location of the Comoros Islands in relation to the neighbouring African countries, nearest Indian Ocean islands and the relevant directions of each. (4)




**[40]****TOTAL SECTION A: 40**


## SECTION B



Answer any FOUR of the five questions in this section.

### QUESTION 2


#### 2.1 AFRICAN SECTION: NAMIBIA

- 2.1.1 Name the capital city of Namibia. (1)
- 2.1.2 Give the time zone in summer of Namibia.  (1)
- 2.1.3 What months are the best to visit Namibia? (1)
- 2.1.4 Name any ONE lake in Namibia. (1)
- 2.1.5 Name and describe two cultural attractions in the capital city, mentioned in QUESTION 2.1.1. (2 × 2) (4)
- 2.1.6 Name ONE of the national parks that lie north of the capital. Your World Travel Atlas may be useful. (1)
- 2.1.7 Describe the general appeal and attraction of the national park you have chosen in QUESTION 2.1.6, with specific reference to the fauna and flora as geographical features in the national park. The World Travel Atlas may be useful.  (6)
- 2.1.8 What is the full name of the International Airport in Namibia? (1)
- 2.1.9 Give TWO examples of traditional shopping items for tourists, excluding fresh produce. (2)
- 2.1.10 Name and describe ONE UNESCO world heritage site in Namibia.  (2)

**2.2 INDIAN OCEAN ISLAND SECTION: MADAGASCAR**



- 2.2.1 Name the central plateau of mountains running down the spine of Madagascar. (1)
- 2.2.2 Consult your GSA.  
 Which airlines fly to Madagascar from SA? Give the airlines' full names and their respective IATA codes. (4)
- 2.2.3 Which primate is endemic to Madagascar? (1)
- 2.2.4 Give THREE examples of the primate mentioned in QUESTION 2.2.3. (3)
- 2.2.5 Name the largest carnivore on the island. (1)
- 2.2.6 Name the city with the code TNR.  (1)
- 2.2.7 Give the full name of the international airport situated in the city mentioned in QUESTION 2.2.6. (1)
- 2.2.8 Give the location of the international airport mentioned in QUESTION 2.2.7 in terms of distance and direction from the city centre. (2)
- 2.2.9 How far ahead in time is Madagascar from SA? (1)
- 2.2.10 Motivate your answer in QUESTION 2.2.9.  (2)
- 2.2.11 What is a *fady*? (2)
- 2.2.12 Give ONE example of a Malagasy *fady*. (1)
- [40]**


**QUESTION 3****AFRICAN SECTION**

Choose ONE of the following countries: ZAMBIA OR ZIMBABWE. Answer ALL the questions relating to the country of your choice. Write the name of the country of your choice in CAPITAL LETTERS at the top of a new page. Keep to the numbering system. 

**3.1 ZAMBIA**

Indicate whether the following statements are TRUE or FALSE. Choose the answer and write only 'True' or 'False' next to the question number (3.1.1–3.1.20) in the ANSWER BOOK.

- 3.1.1 The name of a tour operator based in South Africa is Holidays on Air.
- 3.1.2 Kabwata Cultural village is in Lusaka.
- 3.1.3 The currency code is ZKM.
- 3.1.4 Sinazongwe is a resort town on the banks of Lake Kariba.
- 3.1.5 The area with copper and cobalt mines is called the Cobalt belt.
- 3.1.6 The Mukuni Village is a small settlement of about 1000 Leya people. 
- 3.1.7 The Dag Hammarskjöld Memorial is at Ndola.
- 3.1.8 The Kalambo Falls is the highest waterfall in Africa.
- 3.1.9 Namibia's Caprivi strip forms the northeastern border.
- 3.1.10 The Railway Museum is in Lusaka.
- 3.1.11 Kapenta is an antelope found in Zambia.
- 3.1.12 The black lechwe is endemic to the Bangweulu Wetlands area.
- 3.1.13 Direct flights from South Africa to Ndola depart from Cape Town and Johannesburg.
- 3.1.14 Unity Day is celebrated on 5 July.
- 3.1.15 The email address of the SA representative is lusaka.admin@dirco.gov.za.
- 3.1.16 Kasanka National Park is on the northern side of the Bangweulu Wetlands. 
- 3.1.17 One of the great cultural festivals, the moving of the Litunga, Ku-ombuka, takes place near Lusaka.



- 3.1.18 Livingstone is the political capital of Zambia.  
 3.1.19 The travel time by rail from Lusaka to Ndola is 6 hours 30 minutes.  
 3.1.20 Vehicles drive on the left side of the road. 

(20 × 1) [20]

OR




## 3.2 ZIMBABWE

Choose a description from COLUMN B that matches an item in COLUMN A. Write only the letter (A–V) next to the question number (3.2.1–3.2.20) in the ANSWER BOOK.

COLUMN A		COLUMN B	
3.2.1	Lake Chivero Recreational Park	A	third largest city
3.2.2	Victoria Falls	B	Matobo National Park
3.2.3	Heroes' Day	C	SA Embassy
3.2.4	Dialling code	D	11 August
3.2.5	Misty Mountain	E	4
3.2.6	Elcombe Street	F	Troutbeck Sun
3.2.7	Bulawayo	G	Ambula Safaris & Tours
3.2.8	Mount Nyangani 	H	the highest point
3.2.9	Heroes' Acre	I	00263
3.2.10	Mana Pools	J	border post
3.2.11	Largest national park	K	Chizariria National Park
3.2.12	Nyanga	L	Torwa Dynasty
3.2.13	Houseboating	M	Hwange
3.2.14	The most remote and difficult to reach	N	Shona
3.2.15	Khami ruins	O	Harare
3.2.16	Language	P	Lake Kariba
3.2.17	Plumtree	Q	second largest city
3.2.18	Great Zimbabwe National Monument	R	Bvumba
3.2.19	Helicopter charter	S	12 August
3.2.20	Cecil John Rhodes' grave	T	Elephant Hills Resort Hotel
		U	Masvingo 
		V	Lake Mcllwaine

(20 × 1) [20]

### 3.3 INDIAN OCEAN ISLAND SECTION: SEYCHELLES

- 3.3.1 Name the national airline of Seychelles. Also provide this airline's two-letter IATA code.  (2)
- 3.3.2 Which day(s) of the week (full names) does the national airline of Seychelles offer direct flights from South Africa to the capital? Consult your GSA. (2)
- 3.3.3 Which day(s) of the week (full names) does the national airline of Seychelles offer direct flights from the capital to South Africa? Consult your GSA. (2)
- 3.3.4 What is the average flying time between South Africa and the Seychelles? Consult your GSA.  (2)
- 3.3.5 Give the full name of the departure city in South Africa: JNB. (1)
- 3.3.6 Do South African passport holders require visas for a short holiday to the Seychelles? Consult your GSA, and answer only YES or NO. (1)
- 3.3.7 Recommend THREE health precautions or vaccinations a tourist should take or get for a visit to the Seychelles. Consult your GSA. (3)
- 3.3.8 Recommend TWO hotels in the capital of the Seychelles. Consult your GSA.  (2)
- 3.3.9 Name TWO languages spoken in the Seychelles. (2)
- 3.3.10 List THREE shopping items tourists can buy in the Seychelles. (3)


**[40]**

## QUESTION 4



### AFRICAN SECTION

Choose ONE of the following countries: BOTSWANA OR KENYA. Answer ALL the questions of the country of your choice. Write the name of the country of your choice in CAPITAL LETTERS at the top of a new page. Keep to the numbering system.

### BOTSWANA

- 4.1 Refer to the advertisement on ADDENDUM B: Chobe Bush Lodge, as well as your own resources to answer the following questions.
- 4.1.1 Where is Chobe Bush Lodge situated?  (3)
- 4.1.2 Name the THREE African countries that border Botswana close by. (3)
- 4.1.3 Give the IATA airport code of Kasane International Airport. (1)



- 4.1.4 Name the days of the week when a direct flight from Johannesburg to Kasane is available. Consult your GSA. (1)
- 4.1.5 What is the flight duration (in hours and minutes) of the flight if the flight departs at 11:45 and arrives at 13:30?  (2)
- 4.1.6 Explain what an *en-suite room* is. (1)
- 4.1.7 How will visitors be able to see the largest concentration of elephants in the world?  (2)
- 4.1.8 Name THREE other activities on offer (game drives excluded). (3)
- 4.1.9 Where can visitors enjoy a succulent buffet dinner consisting of starters, main courses and deserts while on a boat cruise? (2)
- 4.1.10 Name ONE other facility on offer. (1)
- 4.1.11 The rates are provided in BWP and USD.  
What is the full name of Botswana's currency? (1)

**OR**

**KENYA**

- 4.2 Refer to the map of Kenya on ADDENDUM C. Identify each of the numbers (1–14) indicated on the map by writing down the question number in the ANSWER BOOK and next to it the answer, for example, 15 Equator.

1–5 Neighbouring countries

6–8 Lakes

9–10 Cities/Towns 

11– Island

12–16 National parks

1 – Ocean

18 – Mountain


19–20 Marine National Parks



(20)

## INDIAN OCEAN ISLAND SECTION

In order to answer the Indian Ocean Island section, you need to do BOTH of the following countries: MAURITIUS AND REUNION.

### 4.3 MAURITIUS

Choose a/an word/item from COLUMN B that matches a description/word in COLUMN A. Write only the letter (A–L) next to the question number (4.3.1–4.3.10) in the ANSWER BOOK. 


COLUMN A		COLUMN B	
4.3.1	The waterfall close to Souillac	A	Grand Baie
4.3.2	The main centre on Mauritius for yachting, water skiing and windsurfing	B	the aquarium
4.3.3	The nature park at the foot of the Moka mountain range	C	Mount Limon and Mount Malartic
4.3.4	Nile crocodiles are bred here	D	Rochester Falls
4.3.5	The lagoon between Trou aux Biches and Pointe aux Piments	E	 the (central) Market
4.3.6	Highest points on Rodrigues	F	La Vanille Crocodile Park
4.3.7	Popular open-air shopping area in Port Louis between Queen and Farguhar Streets	G	Domaine Les Pailles
4.3.8	Place d'Armes	H	Place Sookdeo Bissoondoyal
4.3.9	 One of the beaches on Rodrigues	I	Black River Gorge
4.3.10	A natural lake in the crater of an extinct volcano, regarded as sacred by Hindus	J	Grand Bassin
		K	Pointe Coton
		L	Pamplemousses


(10 × 1) (10)

AND

#### 4.4 REUNION

Choose from the given list destinations/attractions that match the following descriptions:

Belle Combe; Piton des Neiges; Le Bras Sec; L'Etang Sale; Mafate;  
Cilaos; Remparts; Voile de la Mariee; Botanical garden; Brule;  
Piton de la Fournaise 

- 4.4.1 A lookout point in the Cilaos area
- 4.4.2 The mountain pass visible from Nez-de-Boeuf
- 4.4.3 A famous mountain spa
- 4.4.4 The spectacular waterfall near Hell-Bourg
- 4.4.5 The starting point of the footpath to the Roche-Ecrite
- 4.4.6 The most secluded of the cirques 
- 4.4.7 A river that flows into the sea along the West Coast
- 4.4.8 The attraction in St Denis where a variety of plant species can be viewed
- 4.4.9 The highest point on the island
- 4.4.10 The beach known for its five km black-sand beach

(10 × 1) (10)  
[40]

#### QUESTION 5


##### AFRICAN SECTION



Choose ONE of the following countries: MOROCCO OR UGANDA OR MOZAMBIQUE. Answer ALL the questions of the country of your choice. Write the name of the country of your choice in CAPITAL LETTERS at the top of a new page. Keep to the numbering system.

##### 5.1 MOROCCO



Identify the attraction/destination that matches each of the following descriptions:


- 5.1.1 The northernmost mountain range in the country (1)
- 5.1.2 The highest mountain peak and its height in metres  (2)
- 5.1.3 The river that partly borders on Algeria (1)



- 5.1.4 TWO Spanish enclaves along the coast (2)
- 5.1.5 The region that makes up almost half of the country, south of the Drâa River  (1)
- 5.1.6 The oasis near Zagora which boasts a famous library (1)
- 5.1.7 The spectacular gorge in the Drâa river (1)
- 5.1.8 The ancient university in Fès (1)
- 5.1.9 The city known as the Pink City (1)
- 5.1.10 The caves near Cape Spartel (1)
- 5.1.11 The city known as the gateway to Africa (1)
- 5.1.12 The twin city of Rabat  (1)
- 5.1.13 The sea strait between Morocco and Spain (1)
- 5.1.14 The principal commercial city in the country (1)
- 5.1.15 The Roman ruins near Meknes (1)
- 5.1.16 The largest port in the country (1)
- 5.1.17 The best ski resort in the country (1)
- 5.1.18 The famous motor rally that used to pass through the country each year (1)

**OR**

**5.2 UGANDA**



Identify the attraction/destination that matches each of the following descriptions:


- 5.2.1 The region (not a city or town) that is most heavily populated (1)
- 5.2.2 The section of the Nile that flows out of Lake Victoria  (1)
- 5.2.3 The section of the Nile that flows into Sudan (1)
- 5.2.4 The second-largest town in the country (1)
- 5.2.5 The major air gateway to the country (1)
- 5.2.6 The national park that is home to 12 different types of primates (1)

- 5.2.7 The mountain peak on the border with Kenya  (1)
- 5.2.8 TWO lakes that border on the Democratic Republic of Congo (2)
- 5.2.9 The lake (Lake Victoria excluded) divided by the Equator (1)
- 5.2.10 The highest peak in the country and its height in metres (2)
- 5.2.11 The mountain range where the peak mentioned in QUESTION 5.2.10 is located (1)
- 5.2.12 ONE well-known museum in the capital (1)
- 5.2.13 ONE island in Lake Victoria (1)
- 5.2.14 The hot springs near Fort Portal  (1)
- 5.2.15 The largest mahogany forest in East Africa (1)
- 5.2.16 TWO mountain peaks that can be reached from Kisoro (2)
- 5.2.17 The section of the Nile where river-rafting is done (1)

**OR**


**5.3 MOZAMBIQUE**

- 5.3.1 Consult your GSA and give the full name(s) of ONE of the airlines that offers direct flights from South Africa to Mozambique. (2)
- 5.3.2 Name the airport of arrival that most international business travellers to Mozambique use. Also name the two-letter IATA code of this airport.  (2)
- 5.3.3 What is the average flying time from Johannesburg to the airport in QUESTION 5.3.2? Consult your GSA. (2)
- 5.3.4 Name the public holiday in June. (2)
- 5.3.5 Name the highest point in Mozambique and give its height in meters. (2)
- 5.3.6 Give the currency and currency code of Mozambique. (2)
- 5.3.7 Your client would like to travel by road to Mozambique. Provide him with a brief overview of the road conditions.  (2)
- 5.3.8 Name the largest game sanctuary in Mozambique. (1)

- 5.3.9 Give a brief overview of the national park identified in QUESTION 5.3.8, and refer to its location, general appeal and attractions. (4)
- 5.3.10 List ONE tour operator who can assist in planning a tour to Mozambique. Consult your GSA.  (1)

#### 5.4 INDIAN OCEAN ISLAND SECTION

Choose TWO descriptions/attractions from COLUMN B that matches a/an word/item in COLUMN A. Write only the letter (A–K) next to the question number (5.4.1–5.4.5) in the ANSWER BOOK.

COLUMN A		COLUMN B	
5.4.1	Madagascar	A	the Black River (Rivière Noire)
5.4.2	Mauritius	B	Beau Vallon Bay
5.4.3	Reunion 	C	Morné Seychellois
5.5.4	Seychelles	D	Le Lac Salé
5.5.5	Comoros	E	Cirque de Mafate
		F	Mohele
		G	Malé
		H	Seven Coloured Earths of Chamarel
		I	Nosy Tanikely
		J	Hell-Ville
		K	Hell-Bourgh

(5 × 4)


(20)

**[40]**

### QUESTION 6

#### 6.1 AFRICAN SECTION

Choose ONE of the following countries: MALAWI OR TANZANIA. Answer ALL the questions of the country of your choice. Write the name of the country of your choice in CAPITAL LETTERS at the top of a new page. Keep to the numbering system.

- 6.1.1 Describe the exact location of the country of your choice, referring to its neighbouring countries and natural borders.  (4)

- 6.1.2 Give TWO examples of typical souvenirs or gifts a tourist would buy in the country of your choice. (2)
- 6.1.3 Give TWO main economic and agricultural activities o the country of your choice. (2)
- 6.1.4 Name and briefly motivate a visit to THREE cultural attractions in Lilongwe (if you have chosen Malawi) or Dar-es-Salaam (if you have chosen Tanzania). (3 x 2) (6)
- 6.1.5 List any THREE outdoor activities and indicate where a tourist could partake in these activities in the country of your choice. (3 x 2) (6)

6.2 **INDIAN OCEAN ISLAND SECTION**

Choose TWO of the following Indian Ocean Islands: MALDIVES OR COMOROS OR REUNION OR MAURITIUS

Draw a vertical line down the centre of a new page. Write the names of the TWO islands of your choice at the top of each column. Keep the numbering the same as indicated. Answer ALL the questions for both countries.



For example:

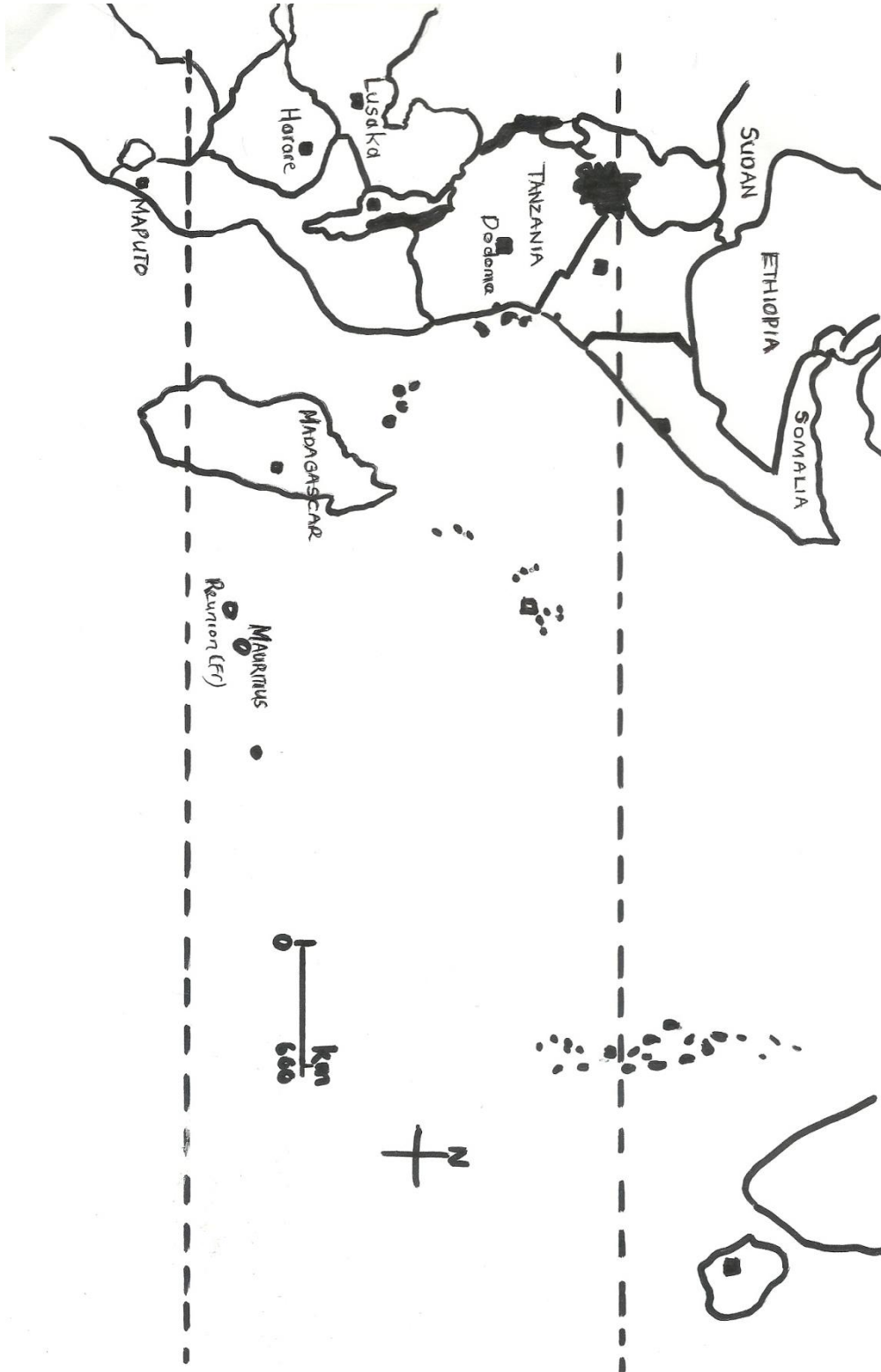
	FIJI	SAMOA
6.2.1		
6.2.2		

- 6.2.1 State the date of 'Independence Day' of the islands of your choice. (2)
- 6.2.2 List THREE traditional shopping items of the islands of your choice. (6)
- 6.2.3 Identify the largest city in the two islands of your choice. (2)
- 6.2.4 List TWO attractions in the city mentioned in QUESTION 5.1.3. (4)
- 6.2.5 List the time zone of the islands of your choice. (2)
- 6.2.6 Give TWO examples of endemic birds that one can find on the islands of your choice. (4)

**[40]**

**TOTAL SECTION B: 160**  
**GRAND TOTAL: 200**

ADDENDUM A





## **ADDENDUM B: BOTSWANA (Chobe Bush Lodge)**

The **Chobe Bush Lodge** is situated in Kasane directly on the border of the Chobe National Park and within 150 m from the Chobe River. Right on our doorstep, four African countries meet (Botswana, Namibia, Zimbabwe and Zambia). The Chobe Bush Lodge is therefore an excellent gateway location to Chobe, the Victoria Falls and Caprivi.

We are within close proximity to the Victoria Falls International Airport, Livingstone International Airport and Kasane International Airport, and are easily accessible, with daily road transfers or charter flights connecting all these airports with the Chobe Bush Lodge.



Flights between Kasane and Johannesburg

### **Accommodation**

The flagship accommodation consists of 38 spacious luxury en-suite rooms, each one with an open-plan bathroom, featuring both a bath and a shower, air-conditioning, TV and safe. The rooms are decorated in a modern bush-style. Bottom rooms have verandas while the top rooms have balconies with exquisite views over the Chobe National Park. There are four large exclusive family rooms consisting of two separate bedrooms, each with its own en-suite facilities.

The rooms and facilities at the Chobe Bush Lodge have different views over the Chobe National Park and the Chobe flood plains in the far distance.

### **Activities**

Along with many species of big game, the Chobe National Park boasts the largest concentration of elephant in Africa, and our game drives and boat cruises offer visitors the opportunity to witness this amazing spectacle. Owing to our physical location we can also offer you a variety of other activities.

- Game drives (morning, afternoon, half day and full day, and private on request)
- Sunset boat cruises
- Private boat hire
- Victoria Falls day trip
- Fishing
- Scenic flights
- Namibian Village Walk
- Cross-border transfers (air and road)

### **Facilities**

#### **Cocktail Bar and Sedudu Bar**

Two bars are located on the property giving guests a choice between the Sedudu Bar, famous for the most beautiful sunsets or the Cocktail Bar, overlooking the Caprivi flood plains.

**Dinner cruises**

Dine under the stars on board one of our boats and turn your evening meal into an unforgettable occasion. Enjoy a succulent buffet dinner consisting of starters, main courses and deserts while the boat cruises on the Chobe River between the shores of Botswana and Namibia.

Sip wine while listening to hippos and other sounds of the African bush. Indulge in the rich flavours of local and internationally influenced cuisine. This is the ideal opportunity to unwind and enjoy the unique surroundings of Chobe by night.

Other facilities we offer: – Activities Centre – Health and Beauty Salon – WiFi – Curio and Craft shop

**Rates**

**Rates valid 1 April 2016–31 March 2017**

<b>Accommodation and meal options</b>	<b>BWP</b>	<b>USD</b>
SAFARI ROOMS – 38 UNITS TOTAL	1565	189
FAMILY ROOMS – 4 UNITS TOTAL	1675	206
BREAKFAST, CONTINENTAL & CHILDREN under 12 yrs	95	16
BREAKFAST, ENGLISH (7:00–10:00)	150	27
LUNCH		
DINNER		A la carte lunch
<b>Activities</b>		A la carte dinner
Game drive (3 hours)/Parking fee not included	<b>BWP</b>	<b>USD</b>
Game drive children/Parking fee not included	265	40
Boat cruise (3 hours)/Parking fee not included	140	22
Boat cruise children/Parking fee not included	235	36
	110	18

**Contact address:**

P.O. Box 10, Kasane, Botswana

**GPS:** S17 48 21.69 E25 08 48.68

**Tel:** (+267) 625 0 383/625 2 480

**Fax:** (+267) 625 0 437

**Email:** reservations@chobebushlodge.com

Chobe Safari Lodge; Chobe Bush Lodge; Chobe National Park; Nata Lodge; Makgadikgadi Salt Pans; Gunns Camp, Okavango Delta; Moremi Crossing, Okavango Delta

[Copyright 2016 Under One Botswana Sky. Website by WildWeb]

ADDENDUM C: MAP OF KENYA

