



**higher education
& training**

Department:
Higher Education and Training
REPUBLIC OF SOUTH AFRICA

NASIENRIGLYN

NATIONALE SERTIFIKAAT

Meganotegniek N6

1 AUGUSTUS 2019

Hierdie nasienriglyn bestaan uit 10 bladsye.

VRAAG 1: REMME

$$1.1 \quad 10x + 9\left(\frac{x}{1,5}\right) = 288 \checkmark$$

$$10x + 6x = 288$$

$$x = 18^\circ \checkmark$$

$$\therefore \theta = \frac{18^\circ}{2} = 9^\circ \checkmark \quad (3)$$

$$1.2 \quad P = \frac{2\pi NT}{60}$$

$$150 \times 10^3 = \frac{2\pi(250)T}{60} \checkmark$$

$$\therefore T = 5,73 \text{ kNm} \checkmark \quad (2)$$

$$1.3 \quad \frac{T_1}{T_2} = \left[\frac{1 + \mu \tan \theta}{1 - \mu \tan \theta} \right]^n$$

$$\frac{T_1}{T_2} = \left[\frac{1 + 0,2 \tan 9}{1 - 0,2 \tan 9} \right]^{10} \checkmark \checkmark$$

$$T_1 = 1,885 T_2 \checkmark \quad (3)$$

$$1.4 \quad T = (T_1 - T_2)R$$

$$5730 = (1,885 T_2 - T_2)0,4 \checkmark$$

$$T_2 = 16,186 \text{ kN} \checkmark$$

$$T_1 = 30,51 \text{ kN} \checkmark$$

$$T_1 \times 150 = T_2 \times 100 + F \times 600 \checkmark$$

$$30510 \times 150 = 16186 \times 100 + F \times 600 \checkmark$$

$$F = 4,93 \text{ kN} \checkmark$$

(6)
[14]

VRAAG 2: WRYWINGSKOPPELAAR

$$2.1 \quad h = w \sin \theta$$

$$= 80,9 \sin 18^\circ \checkmark$$

$$= 25 \text{ mm} \checkmark$$

$$D = d + 2h$$

$$= 140 + 2(25)$$

$$= 190 \text{ mm} \checkmark$$

(3)

$$2.2 \quad T = \frac{60P}{2\pi N}$$

$$= \frac{60(15 \times 10^3)}{2\pi(1440)} \checkmark$$

$$= 99,472 \text{ Nm} \checkmark$$

$$R_f = \frac{R + r}{2} = \frac{95 + 70}{2} = 82,5 \text{ mm} \checkmark$$

$$T = \frac{\mu F_A \times R_f}{\sin \theta}$$

$$99,472 = \frac{(0,3)F_A \times (82,5 \times 10^3)}{\sin 18^\circ} \checkmark$$

$$F_A = 1\,241,961 \text{ N} \checkmark$$

$$F_{engage} = F_A \left(1 + \frac{\mu}{\tan \theta}\right)$$

$$= 1\,241,961 \left(1 + \frac{0,3}{\tan 18^\circ}\right) \checkmark$$

$$= 2\,388,67 \text{ N} \checkmark$$

(7)

$$2.3 \quad P_{MAX} = \frac{F_A}{2\pi(R - r)r}$$

$$= \frac{1\,241,961}{2\pi(0,095 - 0,07)0,07} \checkmark$$

$$= 112,95 \text{ kPa} \checkmark$$

(2)

[12]

VRAAG 3: LYNAS (HOOFDRYFAS)

$$3.1 \quad P = \frac{2\pi N_A T_A}{60}$$

$$40 \times 10^3 = \frac{2\pi(1\,000)T_A}{60} \checkmark$$

$$T_A = 381,972 \text{ Nm} \checkmark \quad (2)$$

$$3.2 \quad D_A N_A = D_B N_B$$

$$(140)(1\,000) = (280)N_B \checkmark$$

$$N_B = 500 \text{ r/min} \checkmark$$

$$P = \frac{2\pi N_B T_B}{60}$$

$$40 \times 10^3 = \frac{2\pi(500)T_B}{60} \checkmark$$

$$T_B = 763,944 \text{ Nm} \checkmark \quad (4)$$

$$3.3 \quad F_t = \frac{2 \times T}{PCD}$$

$$= \frac{2 \times 381,972}{0,14}$$

$$= 5,457 \text{ kN} \checkmark \quad (1)$$

$$3.4 \quad \frac{T_1}{T_2} = e^{\mu\theta}$$

$$\frac{T_1}{T_2} = e^{(0,43)(\pi)} \checkmark$$

$$T_1 = 3,861 T_2 \checkmark$$

$$T = (T_1 - T_2)$$

$$763,944 = (3,861 T_2 - T_2)0,175 \checkmark$$

$$T_2 = 1\,525,828 \text{ N} \checkmark$$

$$T_1 = 5\,891,222 \text{ N} \checkmark \quad (5)$$

$$3.5 \quad \Sigma CWM = \Sigma ACWM$$

$$(882,9 \times 300) + (5\,457 \sin 30^\circ \times 800) + (196,2 \times 1\,250) = R_R \times 1\,000 \checkmark$$

$$R_R = 2\,696,92 \text{ N} \checkmark$$

$$\Sigma CWM = \Sigma ACWM$$

$$(R_L \times 1\,000) + (196,2 \times 250) = (882,9 \times 700) + (5\,457 \sin 30^\circ \times 200) \checkmark$$

$$R_L = 1\,114,68 \text{ N} \checkmark \quad (4)$$

$$3.6 \quad \Sigma CWM = \Sigma ACWM$$

$$(5\,457 \cos 30^\circ)(800) + (R_R \times 1\,000) = (1\,525,828 + 5\,891,222)(1\,250) \checkmark$$

$$R_R = 5\,490,592 \text{ N} \checkmark$$

$$\Sigma CWM = \Sigma ACWM$$

$$(1\,525,828 + 5\,891,222)(250) + (R_L \times 1\,000) + (5\,457 \cos 30^\circ)(200) = 0 \checkmark$$

$$R_L = -2\,799,443 \text{ N} \checkmark \quad (4)$$

[20]

VRAAG 4: VLIEGWIEL

$$\begin{aligned} 4.1 \quad \alpha &= \frac{w_2 - w_1}{t} \\ &= \frac{47,124 - 0}{8} \checkmark \\ &= 5,89 \text{ rad/s}^2 \checkmark \\ w_1 &= \frac{2\pi N}{60} \\ &= \frac{2\pi(450)}{60} \\ &= 47,124 \text{ rad/s} \checkmark \end{aligned} \tag{3}$$

$$\begin{aligned} 4.2 \quad T &= I \alpha \\ &= (45)(5,89) \checkmark \\ &= 265,05 \text{ Nm} \checkmark \\ I &= mk^2 \\ &= (500)(0,3)^2 \\ &= 4,5 \text{ kg} \cdot \text{m}^2 \checkmark \end{aligned} \tag{3}$$

$$\begin{aligned} 4.3 \quad E_k &= \frac{1}{2} I w^2 \\ &= \frac{1}{2} (45)(47,124)^2 \checkmark \\ &= 49,965 \text{ kJ} \checkmark \end{aligned} \tag{2}$$

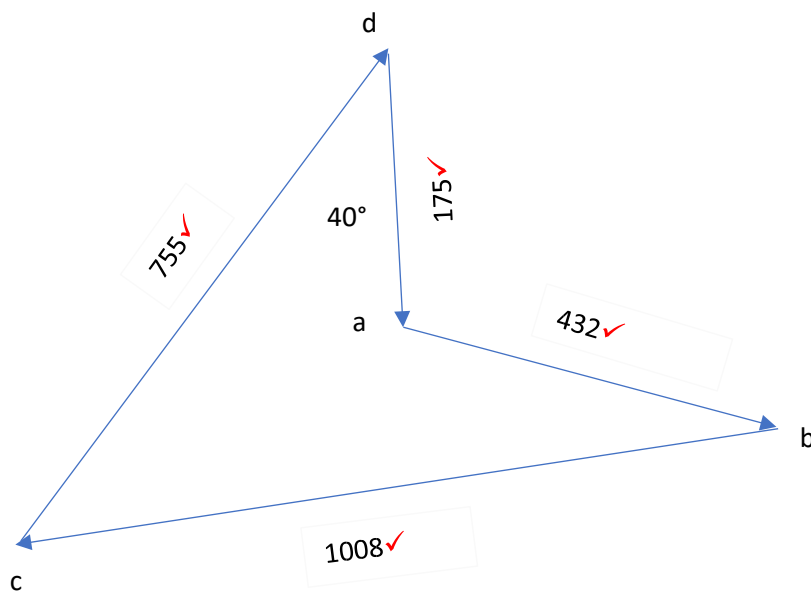
$$\begin{aligned} 4.4 \quad V &= wr \\ &= 47,124 \times 0,6 \checkmark \\ &= 28,274 \text{ m/s} \checkmark \end{aligned} \tag{2}$$

[10]

VRAAG 5: BALANSERING

5.1

	m(kg)	r(mm)	mr(kg.mm)	ℓ(m)	mrℓ(kg. mm. m)
A	10	70	700√	-0,25	-175√
B	8	90	720√	0,6	432√
C	12	60	720√	1,4	1 008√
x	-	-	R_x	0	0
y	-	-	R_y	1,2√	1,2 R_y √



$$755 = 1,2R_y$$

$$R_y = 629,167 \text{ kg. mm} \checkmark$$

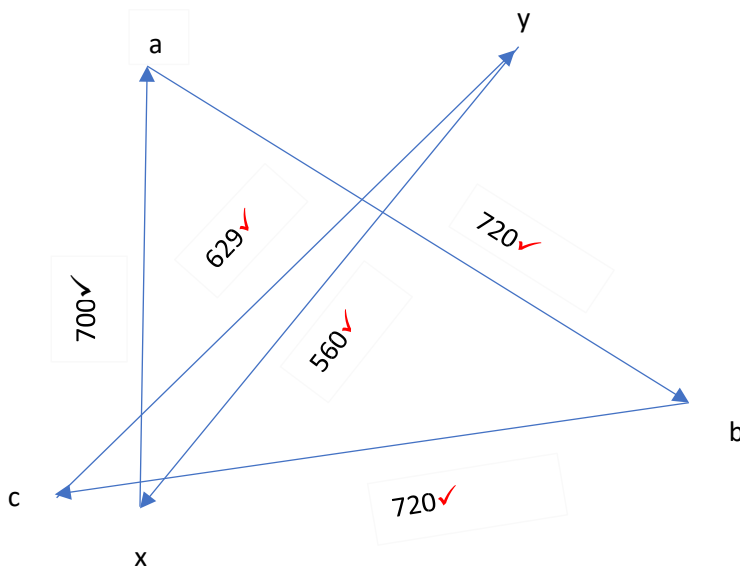
$$\text{dinamiese reaksie op y} = \frac{629,167}{1\ 000} \left(\frac{2\pi N}{60}\right)^2$$

$$= \frac{629,167}{1\ 000} \left[\frac{2\pi(120)}{60}\right]^2 \checkmark$$

$$= 99,354 \text{ N} \checkmark$$

(11)

5.2



$$R_x = 560 \text{ kg} \cdot \text{mm} \checkmark$$

$$\text{dinamiese reaksie op } x = \frac{560}{1\,000} \left(\frac{2\pi N}{60}\right)^2 \checkmark$$

$$= \frac{560}{1\,000} \left(\frac{2\pi 120}{60}\right)^2 \checkmark$$

$$= 88,432 \text{ N} \checkmark$$

(9)
[20]

VRAAG 6: DINAMIKA

6.1 6.1.1 $N_f = 1,8 \times 10^3$

$$= 7\,063,2 \checkmark$$

$$N_R = 1,8 \times 10^3$$

$$= 10\,594,8 \text{ N} \checkmark$$

$$F_a = \mu(mg) \frac{h}{d}$$

$$W_1 = 0,4(1\,800 \times 9,81) \frac{0,7}{3,2} \checkmark$$

$$W_1 = 1\,545,075 \text{ N} \checkmark$$

$$\therefore \text{ Normale reaksie van agterwiel} = N_R - W_1$$

$$= 10\,594,8 - 1\,545,075 \checkmark$$

$$= 9\,049,725 \text{ N} \checkmark$$

(6)

$$6.1.2 \quad F_a = \mu(N_f + W_2) \frac{h}{d}$$

$$\therefore W_2 = \mu(N_f + W_2) \frac{h}{d}$$

$$W_2 = 0,4(7\,063,2 + W_2) \frac{0,7}{3,2} \checkmark$$

$$W_2 = 2\,825,28 + 87,5 \times 10^{-3} W_2$$

$$W_2 = 3\,096,197 \text{ N} \checkmark$$

$$\text{Normale reaksie op agterwiel} = N_R - W_1$$

$$= 10\,594,8 - 3\,096,197 \checkmark$$

$$= 7\,498,603 \text{ N} \checkmark$$

(4)

$$6.2 \quad W_3 = \mu(N_R - W_3) \frac{h}{d}$$

$$W_3 = 0,4(10\,594,8 - W_3) \frac{0,7}{3,2} \checkmark$$

$$W_3 = 4\,237,92 - 87,5 \times 10^{-3} W_3$$

$$W_3 = 3\,896,938 \text{ N} \checkmark$$

$$\text{Normale reaksie op voorwiel} = N_f + W_3$$

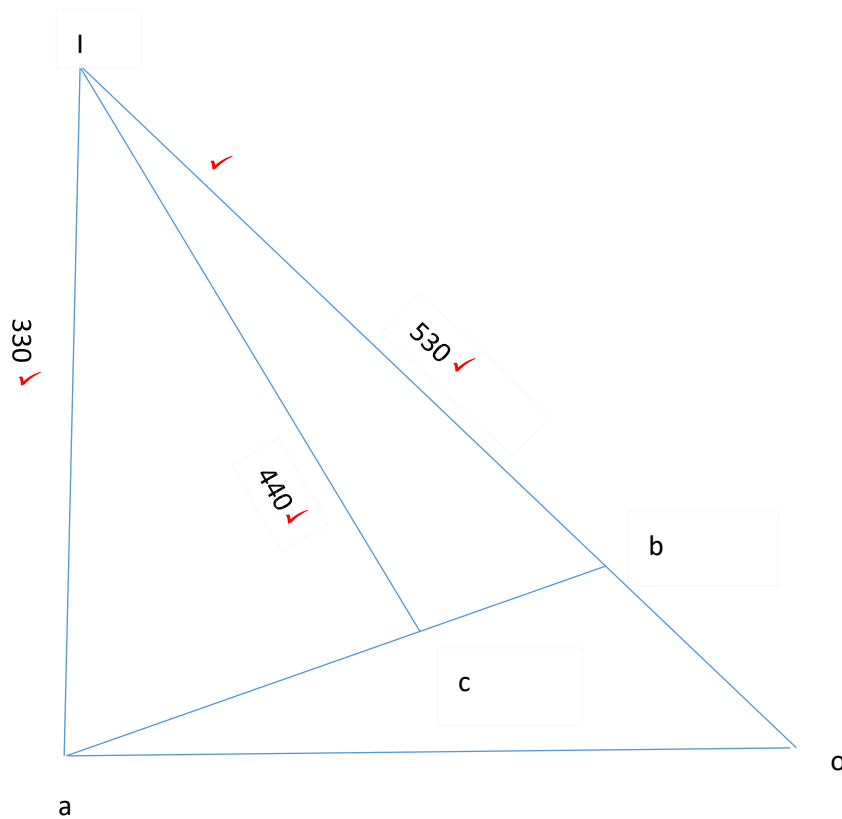
$$= 7\,063,2 + 3\,896,938 \checkmark$$

$$= 10\,960,138 \text{ N} \checkmark$$

(4)

[14]

VRAAG 7: KINEMATIKA



$$V_B = wr$$

$$= \left(\frac{2\pi(100)}{60}\right)(0,12)✓$$

$$= 1,257 \text{ m/s}✓$$

$$V_A = \frac{V_B}{I_B} \times I_A$$

$$= \frac{1,257}{530} \times 330✓$$

$$= 0,783 \text{ m/s}✓$$

$$V_C = \frac{V_B}{I_B} \times I_C$$

$$= \frac{1,257}{530} \times 440✓$$

$$= 1,044 \text{ m/s}✓$$

OF

$$V_C = \frac{V_A}{I_A} \times I_C$$

$$= \frac{0,783}{330} \times 440✓$$

$$= 1,044 \text{ m/s}✓$$

[10]

TOTAAL: 100